

Name

Roll No

ch- Pattern

Class

Sec

1. Discover the pattern and write the next four terms.

(a) ABC CBA DEF FED

(b) 18 20 22 24

(c) 46 44 42 40

(d) 9 15 21 27


(e) 30 27 24 21


(f) 15 25 35 45


(g) 11A 13B 15C 17D


(h) 7 14 21 28

2. Study each pattern and continue the sequence by drawing.


(a)  _____, _____, _____, _____

(b)  _____, _____, _____, _____

(c)  _____, _____, _____, _____

(d)  _____, _____, _____, _____

3. Find the pattern in each and complete it.



(c) 0, 2, 4, 6, _____, _____, _____, _____

(d) 24, 22, 20, 18, _____, _____, _____, _____