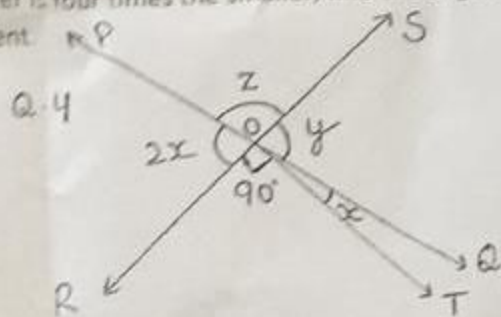
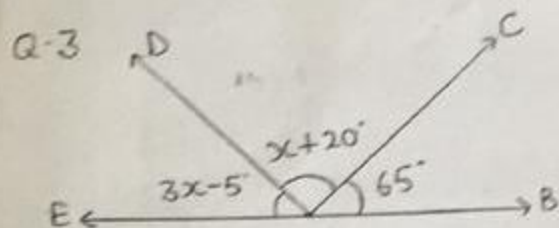


MATHS ASSIGNMENT

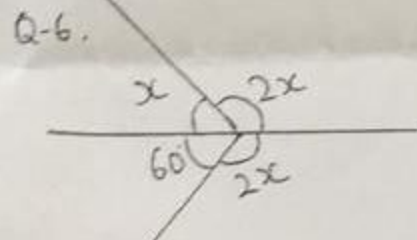
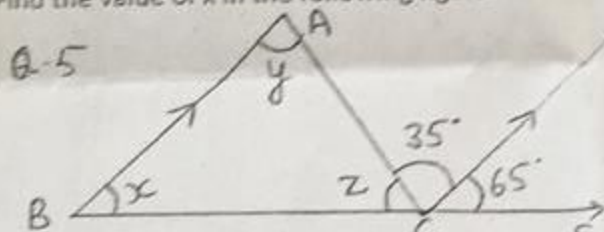
CLASS - VII

CH. - 5 (Lines and Angles)

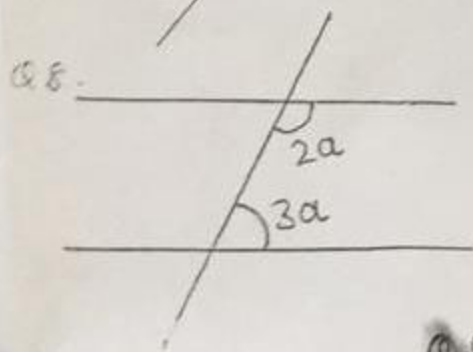
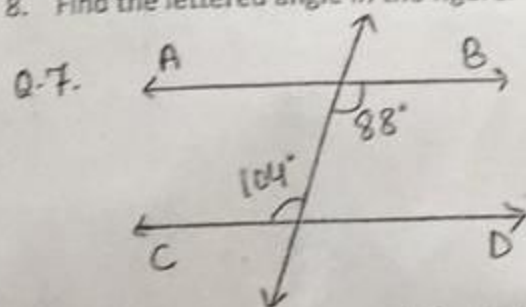
- If two angles are complementary and the larger is four times the smaller, find the angles.
- Find an angle which is four times its supplement.
- Calculate the value of x :



- In the given figure, PQ and RS are two lines intersecting each other at point O. If $\angle ROT = 90^\circ$, find the value of x , y and z .
- In the given figure $\angle DCE = 65^\circ$ and $\angle ACD = 35^\circ$. Find x , y and z .
- Find the value of x in the following figure:



- Are lines AB and CD parallel?
- Find the lettered angle in the figure.



- Find the value of a , b , c and d in the figure:
- Fill in the blanks.

- 1 complete angle = _____ right angles.
- Supplement of an obtuse angle can only be _____
- Complement of 29° is _____

